

18/5/2020

Dear Parents/Guardians,

The following are worksheets for the fortnight beginning May 18th. As before they are read and respond sheets, it is not necessary for you to print them off to complete them. It is important that the children read these worksheets for themselves and attempt a response. See how much they can do themselves and help them when you judge best to do so. As before there is some revision in the form of a quiz before we carry on with the topic of telling the time. There are many instances in day to day life where you can teach the time without resorting to worksheets and books i.e. telling the time, recording how long it takes to do something, consulting a television guide etc. Just so you know, the children have been introduced to the twelve hour clock at quarter hour intervals only. Please remember this is a guideline, you will be able to judge best what is possible for you to do. My email address for you to contact me is room26stjosephs@gmail.com Good Luck!

Ms. Mulvany

18/5/2020

Hello Children,

How are you? Here is some more work to keep you busy. Remember to

- Try and read as much as you can yourself.
- If you get stuck, ask for help.
- Answer the questions in a full sentence.
- Try and do as much as you can.
- Choose some stickers.

There are some stickers at the bottom of the page for you to choose when you finish your work. This week I'd like you to design your own sticker. You could write your own instructions and send them to me and I could try drawing them.



Design a Sticker.


It's time for you to design your own stickers. Try drawing them first and then colouring them in.

Remember to

- Choose a shape you want your sticker to be.
- You could change the look of the shape and give it curved corners instead of pointed corners. I've put curved corners on my square instead of pointed ones.
- Colour it in.



- Decide if you want to put some face or body parts on it.



Choose some words to say **Well Done!**



You could write some instructions so others could make your sticker.

Quick Quiz

Read the sentences. Answer Yes or No.

Score: ___ /24

The word quiz has four letters.

A pentagon has six sides and six corners.

Round rhymes with sound.

The opposite of north is south.

There are seven days in a week.

The four seasons are Spring, Summer, August and Winter.

Easter is in Spring.

A tower is a short building.

The long hand on the clock tells us the hour.

A **STOP** sign has nine sides.

A dice is a cuboid shape.

There are four seasons in a year.

April is in summer.

Spring is the hottest season of the year.

June has 30 days.

Vowel rhymes with bowl.

A fleece is a group of sheep.

An oval is curved.

A precious jewel shares its name with a diamond.

All the faces on a cube are rectangles.

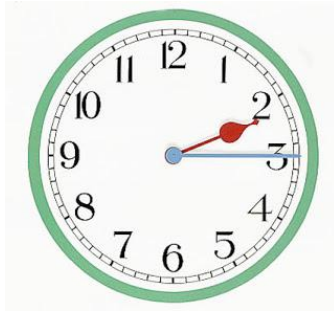
There are twelve seasons in a year.

April comes after May.

March has 31 days.

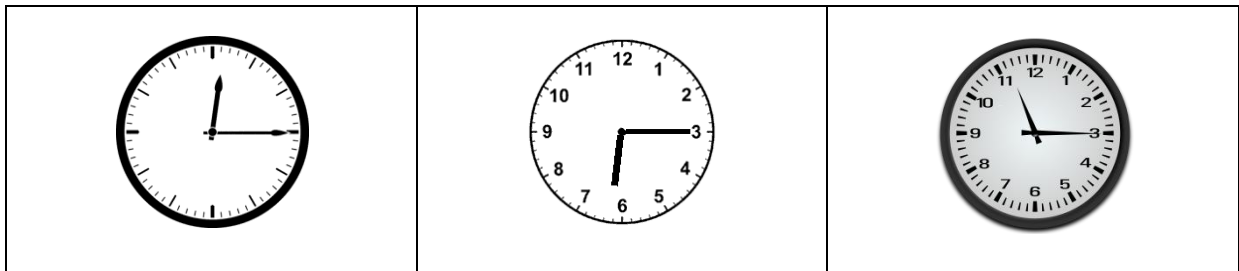
Mow means to cut the grass.

Telling the Time



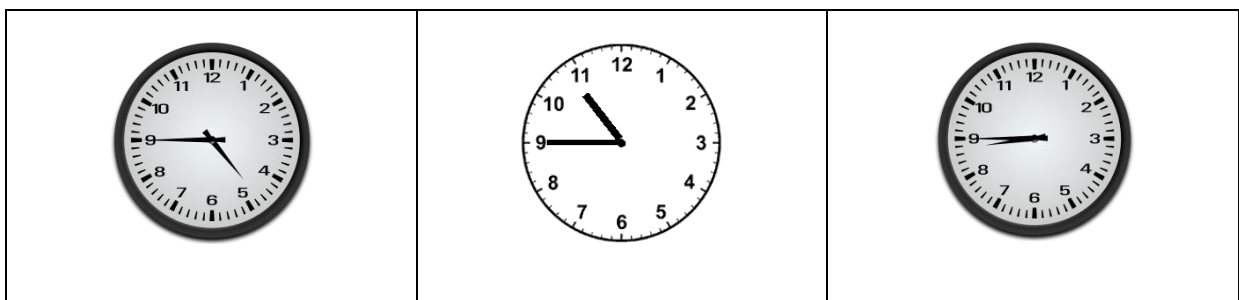
When the **long** hand points straight at **3** it is **quarter past** the hour. We look for the number that the **short** hand has just passed and say it is **quarter past 2**.

Look at the clocks. What time is it?



When the **long** hand points straight at **9** it is **quarter to** the hour. We look for the number that the **short** hand is coming to and say it is **quarter to 12**.

Look at the clocks. What time is it?



The Hour Race

Minute hand standing straight,
Time for a new hour to start the race.
When the minute hand is on the three,
A quarter past it will be.
Half way through hour land,
Six is where you'll find the minute hand.
Don't stop now, you're almost there,
The minute hand will reach the nine,
It's a quarter till it's time to shine.

The Clock

The big hand is busy but the small hand has the power,
The large one counts the minutes but the little one counts the hours.
When both hands stand together, it's sure to be twelve o'clock,
But whether it's twelve at noon or twelve at night,
Depends on whether it's dark or light.

Answer the questions.

How many hands are on the clock?

The numbers on the clock go from 1 to what number?

What number does the long hand point at if it is quarter to?

Which hand points to the hour?






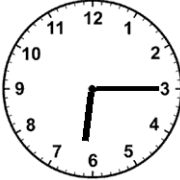


















True or False: Twelve noon is during the day.

Do you know what twelve o'clock at night is called?

Skip count in fives from 5 to 60.

Telling the Time

Look at the clocks. What time is it?

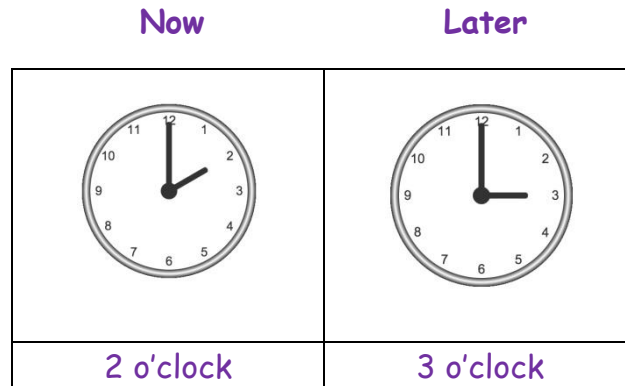
			
			
			
			
			
			

Telling the Time

Later means in time still to come, in the future. For example: *I won't do my homework now. I'll do it later.*

For example: It is *2 o'clock*. What time will it be one hour *later*?

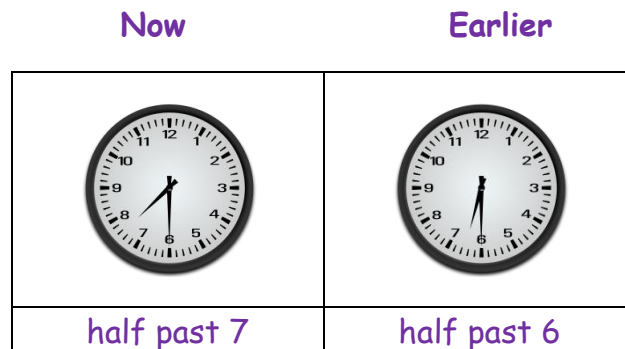
Starting at 12, the big hand has to go forwards around the clock once. One hour *later* it will be *3 o'clock*.



Earlier means happening before a certain time. For example: *The bus should have arrived at 9 o'clock but it came earlier.*

For example: It is *half past 7*. What time was it one hour *earlier*?

Starting at 6, the big hand has to go back around the clock once. One hour *earlier* it was *half past 6*.



Can you work out what time it is earlier or later?

Time	One Hour Later	Time	One Hour Earlier
4 o'clock		7 o'clock	
half past 4		half past 7	
11 o'clock		12 o'clock	
half past 2		half past 8	

The Clock Poem

I'm in the clock crew and I'm Okay, I tick all night and I tick all day.

I've got two hands and I'm having a ball, because I've got no arms at all.

My big hand can move sixty minutes in one hour, it's the one with the strength
and the power.

My small hand isn't quite as fast, if they were in a race, it would come last!

It takes so long just to get around, twelve hours you know, this hand is careful,
small and slow.

Now meet my friends that help me tick tock, half past, quarter past, quarter to
and o'clock.

Did you notice there is a riddle in the poem? Can you work out the answer?

"I've got two hands but I've got no arms at all".

Here are some more riddles. See if you can work them out. There are
picture clues on the next page.

What is full of holes but still holds water?

What becomes wetter the more it dries?

Where can you find cities, towns, shops and streets but no people?

What word is spelt wrong in the dictionary?

If a red house is built of red bricks and a yellow house is made of yellow bricks,
what is a green house made of?

Mr. Blue lives in a blue house. Mrs. Yellow lives in a yellow house. Who lives in
the White House?

What has four legs but cannot walk?

What travels around the world but stays in one spot?













I am an odd number. Take away one letter and I become even. What number am
I?

What has to be broken before you can use it?

When things go wrong what can you always count on?

Picture Clues

Can you name each picture? Can you work out which clue each picture is the answer to?

What country does the stamp come from?

What time is it on the clock?